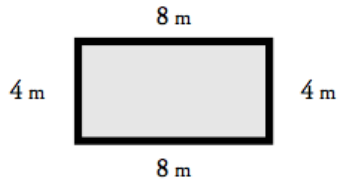


# Perimeter

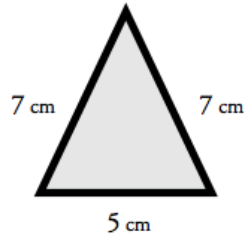
Find the perimeter of each polygon.

a.



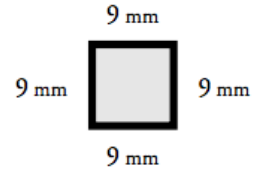
Perimeter = \_\_\_\_\_

b.



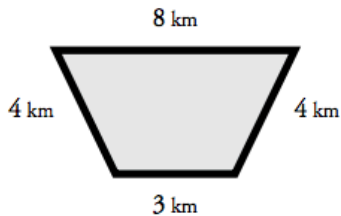
Perimeter = \_\_\_\_\_

c.



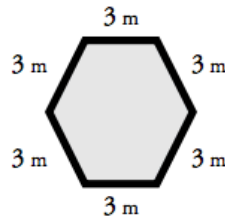
Perimeter = \_\_\_\_\_

d.



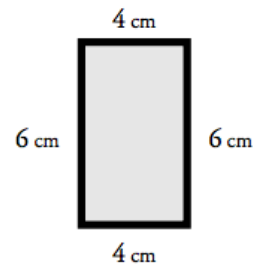
Perimeter = \_\_\_\_\_

e.



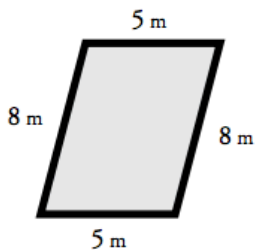
Perimeter = \_\_\_\_\_

f.



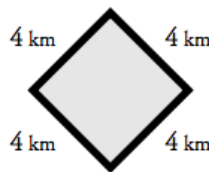
Perimeter = \_\_\_\_\_

g.



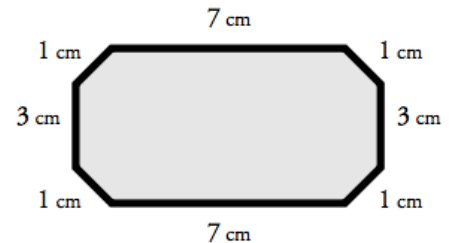
Perimeter = \_\_\_\_\_

h.



Perimeter = \_\_\_\_\_

i.



Perimeter = \_\_\_\_\_

**Bonus Box:** Write the names of the polygons pictured above.